
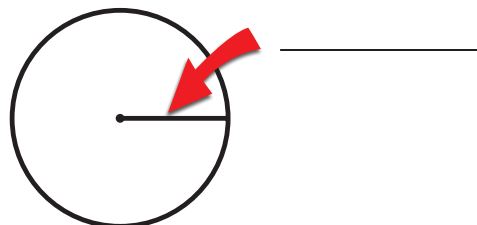


Circles: What is PI?

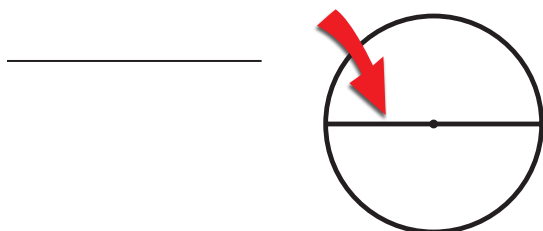
1 What is this part of a circle called?



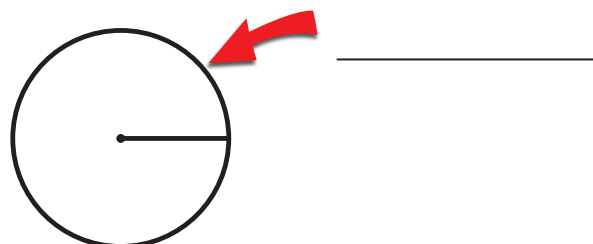
2 What is this part of a circle called?



3 What is this part of a circle called?



4 What is this part of a circle called?



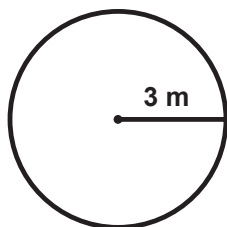
5 Fill in the blanks:

PI is the _____
of a circle's _____
to its _____.

6 What is the numerical value of PI to two decimal places?

$\pi =$ _____

7 If the radius of a circle is 3 meters, what is the circle's diameter?



8 If the diameter of a circle is 14 inches, what is the circle's radius?

