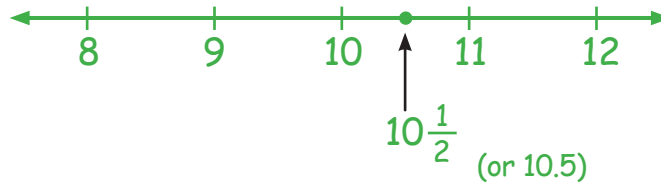
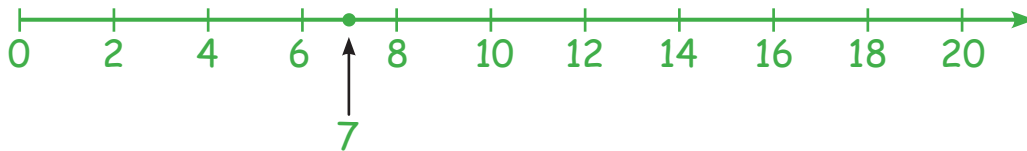


The Number Line

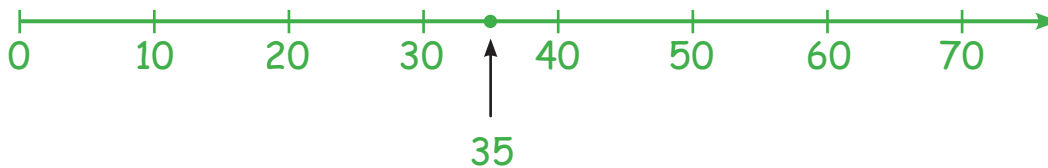
- 1** Draw a number line that goes from 8 to 12. Then put a dot halfway between the whole numbers 10 and 11. What number does that dot represent?



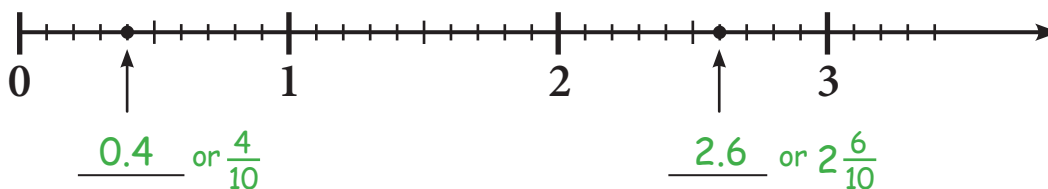
- 2** Draw a number line that goes from 0 to 20, but only show the 'even' numbers on it. Then put a dot halfway between the whole numbers 6 and 8. What number does that dot represent?



- 3** Draw a number line that goes from 0 to 70, but only show multiples of 10. Then put a dot halfway between the whole numbers 30 and 40. What number does that dot represent?



- 4** What numbers do the dots on this number line represent?



- 5** Fill in the missing numbers on this number line.

