

Telling Time

1 Fill in the blanks.

1 hour = _____ minutes

1 day = _____ hours

2 Fill in the blanks.

1 minute = _____ seconds

12 hours = _____ of a day

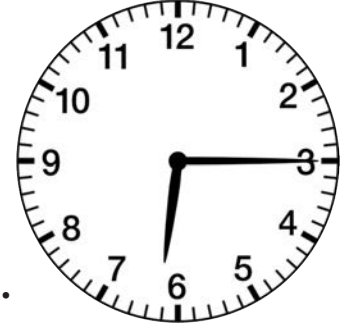
3 What time is it?

____ : ____ p.m.



4 What time is it?

____ : ____ a.m.



5 What time is it?

hint: School is almost out for the day.



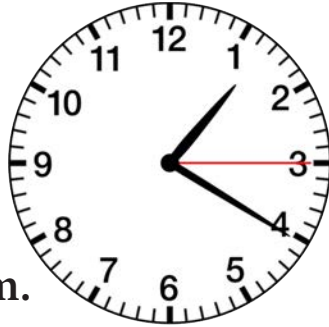
6 What time is it?

hint: The sun won't be up for a while.




7 What time is it?

____ : ____ : ____ a.m.



8 What time is it?

____ : ____ : ____ p.m.



9 What time is it?

hint: You smell dinner cooking.



10 What time is it?

hint: You just woke up.

