

Telling Time

1 Fill in the blanks.

1 hour = 60 minutes

1 day = 24 hours

2 Fill in the blanks.

1 minute = 60 seconds

12 hours = half of a day


3 What time is it?

10 : 30 p.m.



4 What time is it?

6 : 15 a.m.



5 What time is it?

hint: School is almost out for the day.

3:20 p.m.



6 What time is it?

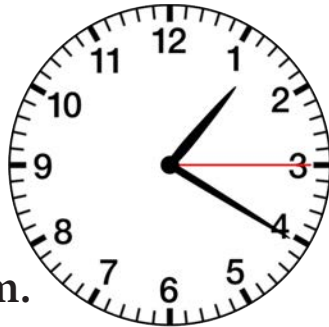
hint: The sun won't be up for a while.

4:45 a.m.




7 What time is it?

1 : 20 : 15 a.m.



8 What time is it?

5 : 18 : 10 p.m.



9 What time is it?

hint: You smell dinner cooking.

6:32:06 p.m.



10 What time is it?

hint: You just woke up.

8:55:20 a.m.

