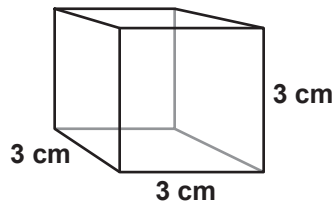
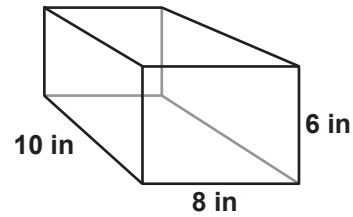


Volume

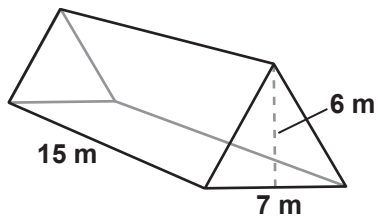
- 1** Find the volume of this cube.



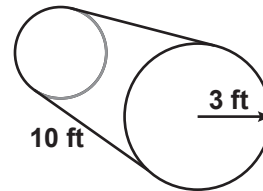
- 2** Find the volume of this rectangular prism.



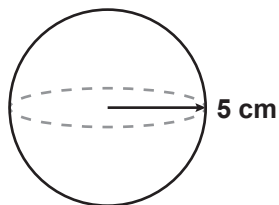
- 3** Find the volume of this triangular prism.



- 4** Find the volume of this cylinder.



- 5** Find the volume of this sphere.



- 6** Find the volume of this cone.

