


Identifying Polygons

Instructions: Tell if each of these objects is a polygon. Mark 'yes' if the object is a polygon. Mark 'no' if it is not.


1

- Yes
 No



2

- Yes
 No



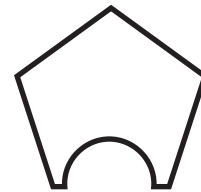
3

- Yes
 No



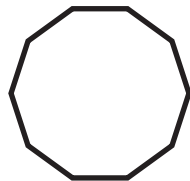
4

- Yes
 No



5

- Yes
 No



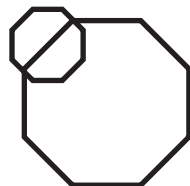
6

- Yes
 No



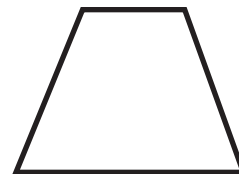
7

- Yes
 No



8

- Yes
 No




9

- Yes
 No



10

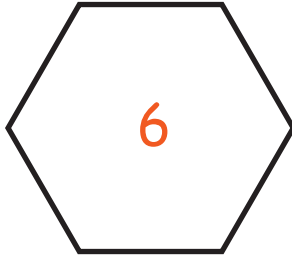
- Yes
 No



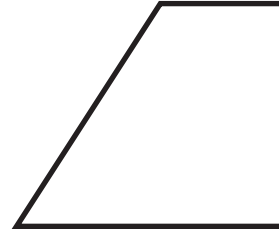
Polygon Sides

Instructions: Count how many sides each of these polygons has and write the total inside the polygon.


1




2




3



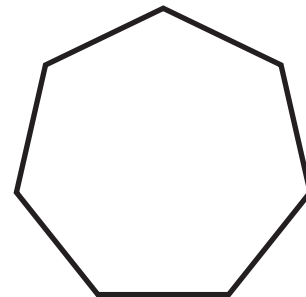
4



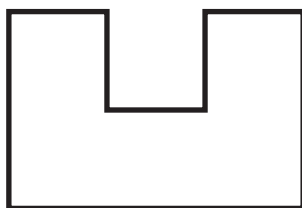
5




6



7



8

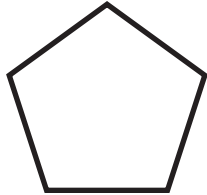


Polygon Names

Instructions: For each polygon, mark the box that matches its name.

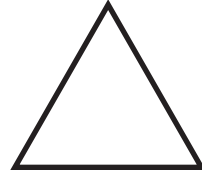
1

- Hexagon
- Triangle
- Pentagon
- Quadrilateral



2

- Pentagon
- Triangle
- Octagon
- Hexagon



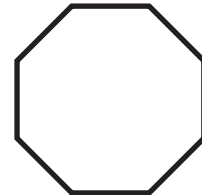
3

- Quadrilateral
- Triangle
- Pentagon
- Octagon



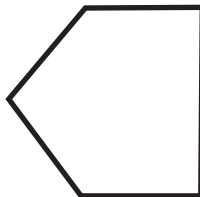
4

- Hexagon
- Octagon
- Triangle
- Quadrilateral



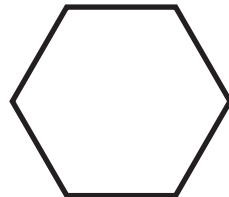
5

- Triangle
- Hexagon
- Quadrilateral
- Pentagon



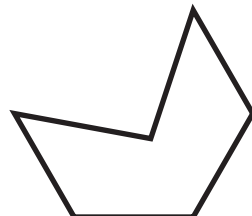
6

- Hexagon
- Pentagon
- Octagon
- Triangle



7

- Quadrilateral
- Triangle
- Hexagon
- Pentagon



8

- Pentagon
- Quadrilateral
- Triangle
- Octagon

